

Nom _____ Montre ce que tu sais! 😊

lundi Compter par ...

1.) 3, 6, _____, _____, _____, _____, _____, _____, _____

2.) 126, 136, _____, _____, _____, _____, _____, _____

3.) 425, 400, _____, _____, _____, _____, _____, _____

4.) 910, 905, _____, _____, _____, _____, _____, _____

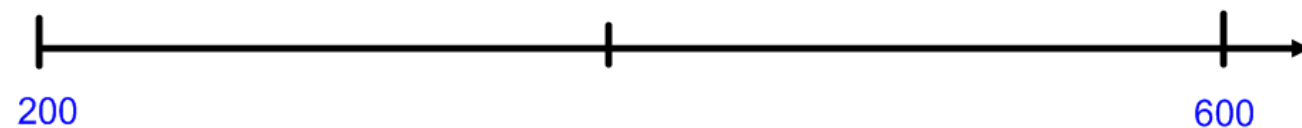
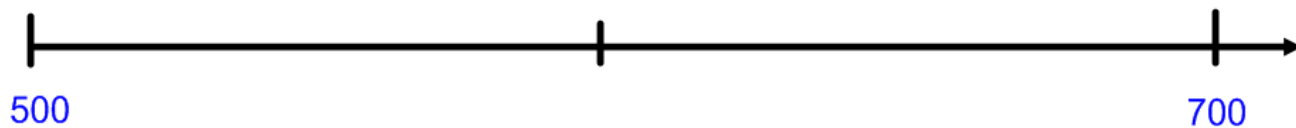
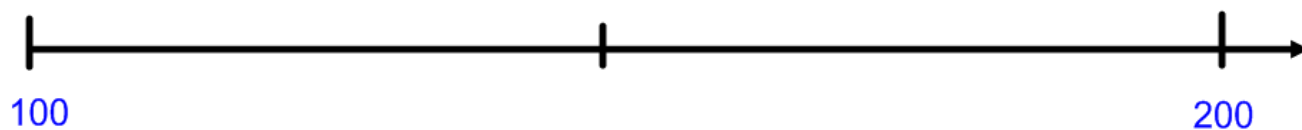
mardi

Mme Robinson a demandé à sa classe de trouver la somme $56 + 54$. Jérémie a dit 100 et Lise a dit 110.

Qui a raison? _____

Quelle était l'erreur de l'autre personne? _____

mercredi Indique les nombres au milieu.

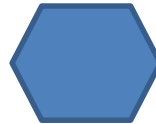
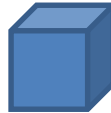



****Boni****

jeudi

Écris les noms qui conviennent à côté de chaque figure:

un croissant, un cylindre, un pentagone, un cube, un triangle, un losange, un cœur,
un trapèze, un hexagone, un carré, un quadrilatère, un polygone



Child's Assessment

This week's homework was:

- Quite easy
- A good challenge
- Pretty difficult

Comments: _____

Parent's Assessment

This week's homework for my child was:

- Quite easy
- A good challenge
- Pretty difficult